

CHANDIGARH HOUSING BOARD

POST: CLERK

Question Booklet & Answer Key

05.03.2023 (SUNDAY)

Directions (Q1 to 3): Identify the error in the underlined parts of the following sentences and choose the correct answer from the options that follow:

1. She, together with her pet dog, were seen at the railway station last evening.
A) B) C) D)
2. Now that Hari is back at work, he has beginning to feel much better.
A) B) C) D)
3. He has a passion for climbing mountains
A) B)
and is contemplates to scale the Mount Everest next year.
C) D)

Directions (Q4 to 6): Identify the correct preposition to be filled in the blanks

4. Such a step will be prejudicial _____ his interests.
A) to B) on C) from D) at
5. Sita is confident _____ her success.
A) over B) from C) in D) of
6. You have to abide _____ the rules.
A) into B) by C) from D) on

Directions (Q7 & 8): Choose the correct synonym for the underlined words

7. Flippant
A) Impudent B) Polite C) Earnest D) Gentle
8. Fatuous
A) Smart B) Stupid C) Feasible D) Feeble

Directions (Q9 & 10): Choose the correct antonym for the underlined words

9. Exude
A) Display B) Hide C) Emanate D) Reveal
10. Ephemeral
A) Permanent B) Entreat C) Transient D) Fast

Directions for (Q11 to 13): Choose the correct meaning of the underlined idioms:

11. To run out of steam
A) A very loud and noisy rain storm B) To run out of an engine
C) To lose enthusiasm and stop doing something D) To run the machine with steam
12. To pull a long face
A) to look happy B) to look treacherous C) to look ugly D) to look dejected
13. To put a spoke in one's wheel
A) to be angry with someone B) to be lazy
C) to thwart someone in the execution of her/his work D) to be overjoyed

Directions (Q14 & 15): The questions below consist of a set of labelled sentences. Out of the given options, select the most logical order of the sentences to form a coherent paragraph:-

14. P: However, our environment also needs some help from all of us to get maintained as usual to nourish our lives forever and to never ruin our lives.
Q: It gives us all things which we need to live our life on this planet.
R: It provides us better medium to grow and develop.
S: An environment includes all the natural resources which surround us to help in many ways.
A) PQRS B) QPSR C) SRQP D) QSPR
15. P: He raised his voice against ritualism and idol worship.
Q: People are generally very open and accept social changes with a positive attitude.
R: Swami Dayanand Saraswati is remembered with reverence and affection among the social reformers of the nineteenth century.
S: India is a country that respects spirituality much more than materialism and ritualism.
A) QRSP B) PRSQ C) RSPQ D) SQRP

Directions (Q16 & 17): Choose the word correctly spelt out of the given options:

16. A) Diarrohia B) Diarrhoea C) Diarohoea D) Dierrhoea
17. A) Scimitars B) Scemitaras C) Scimetars D) Scemetars

51. A person was asked to state his age in years. His reply was, 'Take my age three years hence multiply it by 3 and then subtract three times my age three years ago and you will know how old I am'. What was the age of the person?
 A) 18 years B) 20 years C) 24 years D) 32 years

52. Select the letter- cluster that can replace the question mark (?) in the following series.
 KQG, JTK, HXO, ECS, ?
 A) BIV B) AIW C) AHW D) BIX

Directions (Q53 & 54): A, B, C, D, K, L and M live on seven different floors of a building but not necessarily in the same order. The lower most floor of the building is numbered one and one above that is number two and so on till the topmost floor is numbered seven. Each one of the them are in different profession namely- Engineer, Doctor, Lawyer, Businessman, Teacher, Accountant and Salesman but not necessarily in the same order.

Only three people live between B and K. B lives on one of the floors above K. K does not live on the lowermost floor. Only one person lives between B and the one who is a Lawyer. Only two people live between M and the one who is a Lawyer. The one who is Engineer lives immediately above M. A lives immediately above L. A is not a Lawyer. The one who is Businessman lives on one of the odd numbered floors below L. M is not a businessman. D lives on one of the floor above C. Only one person lives between the one who is Teacher and the one who is Accountant. D is not a Teacher. M is not a Doctor

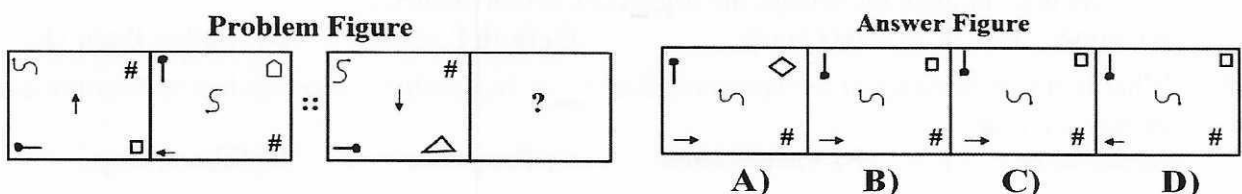
53. Which of the following statements is true with respect to the given arrangement?
 A) C is a Lawyer B) one who is Accountant lives immediately above K
 C) Only two people live between K & M D) C lives on an even numbered floor
54. If all the people are made to sit in alphabetical order from top to bottom, the positions of how many people will remain unchanged?
 A) Three B) Two C) One D) Four

55. Which of the conclusions supports the statement:
All the students in my class are bright. Manish is not bright.
 A) Some students are not bright. B) Manish must work hard.
 C) Non-bright ones are not students. D) Manish is not a student of my class.

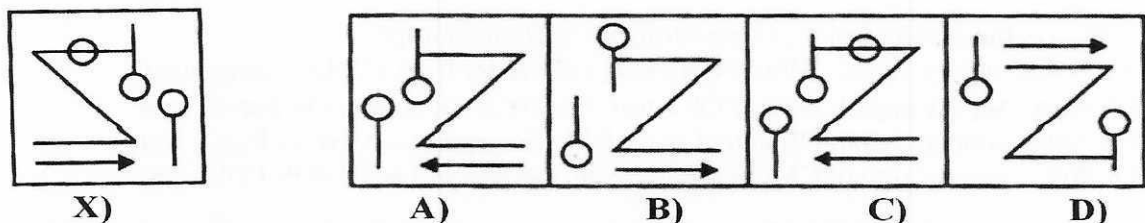
56. In the question, a few statements followed by four conclusions I, II, III and IV are given. Consider every given statements as true, even if it does not conform to the well known facts. Read the conclusions and then decide which of the conclusions can be logically derived.

Statements : 1. All books are pens. 2. Some boys are books. 3. No pen is a pencil.
 Conclusions : I. Some pens are boys. II. Some books are pencils.
 III. No Book is a pencil. IV. Some boys are not pencils.

- A) Only I, II and IV follow. B) Only II, III and IV follow.
 C) Only I, III and IV follow. D) Either II or III and I follow.
57. The second figure in the first part of the problem figures bears certain relationship to the first figure. Similarly, one of the figures of answer figures bears the same relationship to the first figure of the second part. You have to select a figure from the set of answer figures which would replace the question mark (?).



58. Choose the correct mirror – image of the fig. (X) from amongst the four given alternatives.



59. The six faces of a solid cube have been painted in different colours. The top of the cube is painted Red and the bottom is painted White. The rest of the four faces have been painted Yellow, Blue, Green and Pink respectively in clockwise direction. The cube is now turned in such a manner that Blue face is at the top. What will be the colour of the bottom face?
 A) Pink B) White C) Yellow D) Green
60. Below are given a set of analogies. Which of these analogies are appropriate?
 I) Ocean : Pacific :: River : Nile II) Pedology : Soil :: Demography : Population
 III) Sky : Cloud :: Canal : Mountain
 A) Only I B) Only II C) Only I and II D) Only II and III
61. Which of the following statement(s) is/are true with regard to computers?
 P: Multitasking refers to a combination of text, graphics, animation, video, music, voice, and sound effects used to communicate a message.
 Q: Thesaurus tool in MS-WORD is used for grammar checking.
 A) P only B) Q only C) Both P and Q D) Neither P nor Q
62. Which of the following statement(s) is/are true with regard to computers?
 P: An unsolicited e-mail message sent to many recipients at once is a spyware.
 Q: With regard to email, bcc: means Blind Carbon Copy.
 A) P only B) Q only C) Both P and Q D) Neither P nor Q
63. Consider the following MS-EXCEL worksheet:

	A	B	C
17	Day	Quantity	Sales Amount
18	Monday	1	234
19	Tuesday	3	144
20	Wednesday	6	367
21	Thursday	5	674
22	Friday	8	1099
23	Saturday	3	233
24			

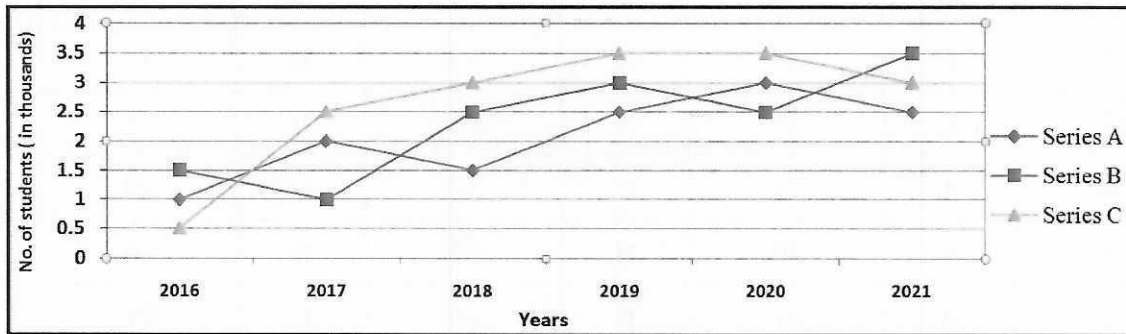
- The value returned by the function =SUMIFS(C18:C23,B18:B23,">3",C18:C23,">500") is given by _____.
 A) 1466 B) 2140 C) 1773 D) 26
64. Which of the following statement(s) is/are true with regard to computers?
 P: Pattern of connections between the devices on a network is called Topology.
 Q: "http" you type at the beginning of any web site's address stands for Hyper Text Transfer Protocol.
 A) P only B) Q only C) Both P and Q D) Neither P nor Q
65. Which of the following statement(s) is/are true with regard to computers?
 P: In computer networking, IPv6 uses 128-bit number for IP addresses.
 Q: INTERNET is an interconnected network, usually one that uses the TCP/IP protocol set, and does not extend beyond the organization that created it.
 A) P only B) Q only C) Both P and Q D) Neither P nor Q
66. What is the technological advancement that made it possible for computers to become as small as they are today?
 A) Repeater B) Vacuum tube C) Transistor D) Silicon chip
67. The data in a digital computer is stored in terms of bits/bytes where one PetaByte is equal to:
 A) 2^{43} bits B) 2^{50} bits C) 2^{53} bits D) 2^{60} bits
68. Which is the correct order of operations for system startup?
 A) Power supply signal, BIOS POST test, OS kernel load, CMOS comparison
 B) Power supply signal, BIOS POST test, CMOS comparison, OS kernel load
 C) Power supply signal, OS kernel load, CMOS comparison, BIOS POST test
 D) Power supply signal, CMOS comparison, OS kernel load, BIOS POST test

69. What is the difference between primary and secondary storage?
 A) Primary storage is slower, more expensive and persistent
 B) Primary storage is faster, less expensive and persistent
 C) Primary storage is faster, more expensive and not persistent
 D) Primary storage is faster, less expensive and not persistent
70. Which of the following statements is TRUE?
 A) Software is loaded into secondary storage from primary storage & is then executed by CPU
 B) Software is loaded into secondary storage from RAM & is then executed by CPU
 C) Software is loaded into RAM from secondary storage & is then executed by CPU
 D) Software is loaded into RAM from secondary storage & is then executed by motherboard
71. The transmission time required for sending a 512-Byte packet using a 56 kbps modem is:
 A) about 7 milliseconds
 B) about 40 milliseconds
 C) about 70 milliseconds
 D) about 90 milliseconds
72. A _____ is a utility that reorganizes the files and unused space on a computer's hard disk so the operating system can access data more quickly and programs can run faster.
 A) File compression utility
 B) Disk defragmenter
 C) Disk scanner
 D) File viewer
73. The process of copying files to a CD is known as:
 A) burning
 B) copying
 C) storing
 D) pasting
74. For each instruction of a program in the memory, the CPU goes through a
 A) decode - fetch - execute sequence.
 B) execute - store - decode sequence.
 C) fetch - decode - execute sequence.
 D) fetch - execute - decode sequence.
75. Which of the following sets of device lists has the devices correctly classified?

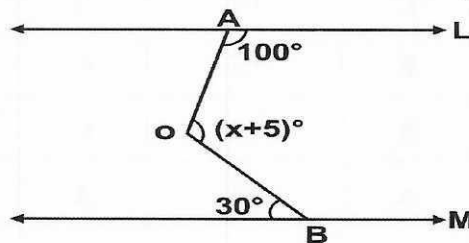
	Input	Output
A)	keyboard, mouse, trackball, touch screen	printer, mouse, speakers, touch screen
B)	keyboard, mouse, trackball, microphone	printer, screen, speakers, plotter
C)	screen, mouse, trackball	printer, screen, speakers, joystick
D)	keyboard, mouse, trackball, touch screen	keyboard, screen, speakers

76. Clock speed, the speed at which a processor executes instructions, is measured in _____, which equates to one million ticks of the system clock.
 A) kilobytes (KB)
 B) milliseconds (ms)
 C) megahertz (MHz)
 D) kilo-bits-per-second (Kbps)
77. From what has the term 'Wi-Max' been derived?
 A) Worldwide Interoperability for Microwave Access
 B) Worldwide Interconnection for Microwave Access
 C) Worldwide Interchangeability for Microwave Access
 D) Worldwide Interconnection for Multiple Access
78. Which of the following views is the best view to use when setting transition effects for all slides in a presentation?
 A) Slide sorter view
 B) Notes pages view
 C) Slide view
 D) Outline view
79. A personal Web page that typically contains a series of chronological entries by its author, and linked to related Web pages is called a(n):
 A) Private industrial exchange
 B) Blog
 C) Social networking site
 D) Electronic data interchange
80. As you travel up the memory hierarchy (to the smallest-sized computer memory), which of the following is correct?
 A) Decreasing cost per bit and increasing access time
 B) Increasing cost per bit and increasing access time
 C) Increasing cost per bit and decreasing access time
 D) Decreasing cost per bit and decreasing access time
81. A man spends $\frac{2}{5}$ of his income on house rent, $\frac{3}{10}$ on food and $\frac{1}{8}$ on conveyance. If he has Rs.2800 left with him. Find his expenditure on food and conveyance together.
 A) Rs.7000
 B) Rs.5500
 C) Rs.6700
 D) Rs.6800

92. What percent of total weight of human body is equivalent to the weight of the proteins in skin in human body?
 A) 0.016 B) 0.16 C) 1.6 D) Data inadequate
93. The following line graph shows the number of students (in thousands) in three schools A, B & C over the years from 2016 to 2021. What was the difference between the total number of students in all the schools together in the year 2017 and the number of students in school B in the year 2019?



- A) 2000 B) 3000 C) 3500 D) 2500
94. A box contains 3 Red & 7 white balls. One ball is drawn at random and in its place a ball of other colour is put in the box. Now one ball is drawn at random from the box. Find the probability that it is red.
 A) 0.06 B) 0.28 C) 0.34 D) 0.0168
95. Shantanu's cap is in the form of a right circular cone of base radius 7 cm and height 24 cm. Find the area for the sheet required to make 5 such caps.
 A) 5000 sq.cm B) 2750 sq.cm C) 3000 sq.cm D) 2700 sq.cm
96. In the given figure, if $L \parallel M$ find the value of X in degree.



- A) 105° B) 100° C) 110° D) 115°
97. There are two inlets A and B connected to a tank. A and B can fill the tank in 16 hours and 10 hours respectively. If both the pipes are opened alternatively for 1 hour, starting from A, then how much time will the tank take to be filled?
 A) $13\frac{1}{4}$ hrs. B) $11\frac{6}{8}$ hrs. C) $12\frac{2}{5}$ hrs. D) $12\frac{1}{4}$ hrs.
98. A sum of money lent at compound interest for 2 years at 20% per annum would fetch Rs.964 more, if the interest was payable half yearly than if it was payable annually. What is the sum?
 A) Rs.40000 B) Rs.60000 C) Rs.90000 D) Rs.500000
99. Evaluate $\frac{1}{6} \times \sqrt{41 - \sqrt{21 + \sqrt{19 - \sqrt{9}}}}$
 A) 6 B) 4 C) 1 D) 9
100. Arun and Dhiraj together have Rs. 285. If $\frac{2}{3}$ rd of money with Arun is equal to $\frac{3}{5}$ th of money with Dhiraj, then what is the money with Arun?
 A) Rs.150 B) Rs.200 C) Rs.85 D) Rs.135

Chandigarh Housing Board

Post: Clerk

Answer Key A-Series : 05.03.2023 (Sunday)

Q.No.	Ans	Q.No.	Ans	Q.No.	Ans	Q.No.	Ans
1	B	26	D	51	A	76	C
2	C	27	A	52	B	77	A
3	C	28	A	53	B	78	A
4	A	29	C	54	C	79	B
5	D	30	B	55	D	80	C
6	B	31	B	56	C	81	D
7	A	32	D	57	B	82	A
8	B	33	C	58	C	83	B
9	B	34	C	59	A	84	D
10	A	35	C	60	C	85	A
11	C	36	D	61	D	86	B
12	D	37	C	62	B	87	A
13	C	38	B	63	C	88	C
14	C	39	A	64	C	89	A
15	D	40	A	65	A	90	D
16	B	41	B	66	D	91	C
17	A	42	D	67	C	92	C
18	A	43	C	68	B	93	D
19	B	44	A	69	C	94	C
20	A	45	D	70	C	95	B
21	C	46	B	71	C	96	A
22	A	47	C	72	B	97	C
23	D	48	D	73	A	98	A
24	B	49	A	74	C	99	C
25	B	50	C	75	B	100	D